

Fully Solved

3200 MCQs

Useful For

ESE | GATE | PSUs

Civil Engineering

by

B. Singh (Ex. IES)

CMD, MADE EASY Group





MADE EASY Publications Pvt. Ltd.

Corporate Office: 44-A/4, Kalu Sarai (Near Hauz Khas Metro Station), New Delhi-110016

E-mail: infomep@madeeasy.in

Contact: 9021300500

Visit us at: www.madeeasypublications.org

3200 Multiple Choice Questions for ESE, GATE, PSUs : Civil Engineering

© Copyright, by MADE EASY Publications Pvt. Ltd.

All rights are reserved. No part of this publication may be reproduced, stored in or introduced into a retrieval system, or transmitted in any form or by any means (electronic, mechanical, photo-copying, recording or otherwise), without the prior written permission of the above mentioned publisher of this book.

First Edition: 2013

Second Edition: 2018

Reprint: 2019

Reprint: 2020

Reprint: 2021

Reprint: 2022

Reprint: 2023

Reprint: 2024

Published by: MADE EASY Publications Pvt. Ltd., New Delhi-110016

PREFACE



It gives me great happiness to introduce the second edition on Civil Engineering containing nearly 3200 MCQs which focuses in-depth understanding of subjects at basic and advanced level which has been segregated topic-wise to disseminate all kind of exposure to students in terms of quick learning and deep apt. The chapter wise segregation has been done to align with contemporary competitive examination pattern. Attempt has been made to bring out all kind of probable competitive questions for the aspirants preparing for ESE, GATE, PSU. The content of this book ensures threshold level of learning and wide range of practice questions which is very much essential to boost the exam time confidence level and ultimately to succeed in all prestigious engineer's examinations. It has been ensured from MADE EASY team to have broad coverage of subjects at chapter level.

Year by year number of competitors are increasing and the variety of questions asked in examination is widening, under such scenario this book will definitely help students to enhance their skills required to succeed in competitive exams like ESE, GATE, PSUs, State Engineering Services etc.

While preparing this book utmost care has been taken to cover all the chapters and variety of concepts which may be asked in the exams. The solutions and answers provided are upto the closest possible accuracy. The full efforts have been made by MADE EASY Team to provide error free solutions and explanations.

I have true desire to serve student community by way of providing good sources of study and quality guidance. I hope this book will be proved an important tool to succeed in competitive examinations. Any suggestions from the readers for the improvement of this book are most welcome.

B. Singh (Ex. IES)

Chairman and Managing Director
MADE EASY Group

CONTENTS

I. Strength of Materials	1	8. Sewage Treatment	151
1. Properties of Metals, Simple		9. Sewage Collection from	
Stress-Strain and Elastic Constants	1	Houses and Buildings	154
2. Shear Force and Bending Moment	6	10. Disposal of Solid Wastes.....	155
3. Bending and Shear Stress.....	10	11. Air and Sound Pollution.....	156
4. Principal Stress and Strain	13		
5. Theories of Failure	15	V. Reinforced Cement Concrete.....	181
6. Deflection of Beams	16	1. Beams & Slabs.....	181
7. Thin & Thick Cylinders and Spheres.....	19	2. Shear	188
8. Torsion of Shafts.....	22	3. Bond, Anchorage, Development	
9. Theory of Columns.....	24	Length & Torsion.....	189
		4. Columns.....	191
II. Structural Analysis	46	5. Footings	193
1. Determinacy and Indeterminacy.....	46	6. Prestress Concrete.....	194
2. ILD and Rolling Loads	50	6. Miscellaneous	196
3. Arches.....	55		
4. Methods of Indeterminate Analysis.....	58	VI. Design of Steel Structures	213
5. Trusses	65	1. Structural Fasteners.....	213
		2. Tension Members	218
III. Soil Mechanics	86	3. Compression Members	220
1. Soil Types & Formations	86	4. Beams	222
2. Properties of Soil.....	87	5. Plate Girders	224
3. Soil Classification and Soil Structure	91	6. Industrial Roofs	226
4. Soil Compaction.....	92	7. Plastic Analysis.....	227
5. Principle of Effective Stress,			
Capillarity & Permeability	94	VII. Fluid Mechanics	241
6. Seepage Analysis.....	96	1. Fluid Properties	241
7. Stress Distribution in Soil.....	97	2. Fluid Pressure and Measurement	243
8. Compressibility & Consolidation.....	99	3. Hydrostatic Force on Surface	245
9. Shear Strength of Soil	101	4. Buoyancy and Floatation	246
10. Stability of Earth Slopes	104	5. Liquids in Relative Equilibrium	247
11. Lateral Earth Pressures & Retaining Walls...	105	6. Fluid Flow Kinematics	248
12. Bearing Capacity & Shallow Foundation	107	7. Dimensional and Model Analysis	251
13. Pile Foundation	110	8. Energy Equation and its Applications.....	253
14. Soil Exploration	111	9. Flow Over Notches and Weirs	254
		10. Flow Through Pipes	255
IV. Environmental Engineering	135	11. Boundary Layer Theory	257
1. Water Demand	135	12. Laminar Flow in Pipes	260
2. Sources & Conduits for Water Supply.....	136	13. Turbulent Flow in Pipes.....	261
3. Quality Control of Water Supply	137	14. Flow Through Open Channels.....	262
4. Purification of Water	140	15. Fluid Machines	267
5. Distribution System	145		
6. Sewage Collection	146	VIII. Engineering Hydrology.....	294
7. Quality and Characteristics of Sewage ...	149	1. Introduction	294
		2. Precipitation	294

3. Abstractions from Precipitation	298	XI. Construction Planning and Management...366
4. Streamflow Measurement.....	299	1. Introduction
5. Runoff	301	2. CPM & PERT.....
6. Hydrographs	303	3. Crashing of Networks and Engineering Economy
7. Floods	306	4. Resource Allocation and CPM Updating
8. Flood Routing	308	5. Engineering Equipments.....
IX. Irrigation Engineering	319	XII. Building Materials
1. Irrigation Techniques and Water Requirement of Crops.....	319	1. Cement, Mortar and Lime
2. Canal Irrigation & Cross Drainage Works	322	2. Concrete Technology
3. Sediment Transport and Design of Irrigation Channel	322	3. Bricks and Brick Masonry
4. Lining of Irrigation Canals	324	4. Timber
5. Reclamations and Waterlogging in Soils...	325	XIII. Transportation Engineering
6. River Training Works	326	Section-A : Highway Engineering
7. Canal Regulators.....	327	1. Highway Development and Planning....
8. Dam and Reservoirs.....	328	2. Highway Geometric Design.....
9. Gravity Dams, Earthen Dams and Rock Fill Dams	329	3. Traffic Engineering
10. Spillways	331	4. Pavment Design.....
X. Surveying	342	5. Highway Materials, Construction & Maintenance
1. Fundamental Concepts, Accuracy and Errors.....	342	Section-B : Railway Engineering
2. Linear Measurements	343	6. Train Resistance and Rolling Stock.....
3. Compass Surveying and Theodolites	345	7. Rails and Rail Gauges
4. Traverse Surveying and Contouring.....	347	8. Rail Fastenings.....
5. Levelling.....	349	9. Sleepers and Ballast.....
6. Plane Table Surveying & Calculation of Area and Volume.....	352	10. Maintenance, Curvature of Track and Creep
7. Tacheometric, Curve and Hydrographic Surveying	354	11. Points and Crossings
8. Tides, Triangulation, Astronomy and Photogrammetric Surveying	356	Section-C : Airport Engineering
		12. Airport Engineering.....
		Section-D : Docks, Harbours & Tunnel Engineering
		13. Docks, Harbours & Tunnel Engineering. 439

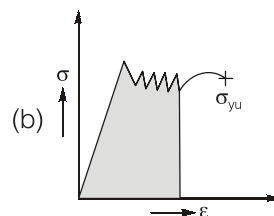
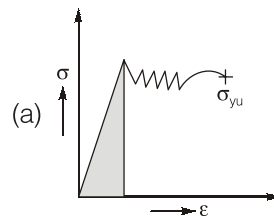


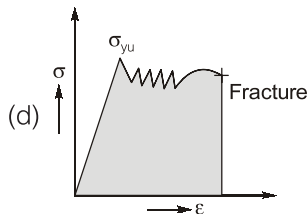
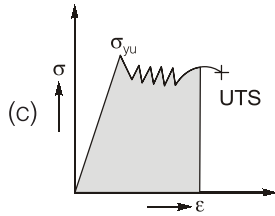
1. Properties of Metals, Simple Stress-Strain and Elastic Constants

- Q.1** A material has identical properties in all directions, it is said to be
(a) homogeneous (b) isotropic
(c) elastic (d) orthotropic
- Q.2** The term nominal stress in stress-strain curve for mild steel implies
(a) average stress (b) actual stress
(c) yield stress (d) stress at necking
- Q.3** For metallic minerals creep becomes an important consideration at
(a) 500°C
(b) 550°C
(c) half of the melting point temperature on absolute scale
(d) any temperature
- Q.4** Clapeyron's theorem is associated with the analysis of
(a) simply supported beams
(b) fixed beams
(c) continuous beams
(d) cantilever beams
- Q.5** A rubber band is elongated to double its initial length, its true strain is
(a) 0.500 (b) 0.693
(c) 1.00 (d) 1.386
- Q.6** A prismatic beam has uniform
(a) depth (b) width
(c) strength (d) cross-section
- Q.7** In the case of pure bending, the beam will bend into an arc of a
(a) circle (b) parabola
(c) ellipse (d) hyperbola
- Q.8** If the modulus of elasticity is zero, the material is said to be
(a) rigid (b) elastic
(c) flexible (d) plastic
- Q.9** The compressibility of a material is proportional to
(a) Poisson's ratio μ
(b) modulus of elasticity (E)
(c) reciprocal of E
(d) reciprocal of μ
- Q.10** If a beam with the rectangular cross-section is obtained by cutting from circular log of timber, then for the beam to have strongest section in bending, the ratio of breadth to depth should be
(a) 0.500 (b) 0.707
(c) 0.717 (d) 0.786
- Q.11** According to St. Venant's principle
(a) Deformations of all materials for a given loading are equal
(b) It is a method of determining stress conditions at the end of the plates
(c) Stress conditions approach uniformly as the distance from the point of applications of the load increase
(d) After a point of time the stresses in a loaded member tend to relieve
- Q.12** Notched bar tests are frequently used for testing the
(a) impact strength of a material
(b) hardness of a material
(c) machinability of a metal
(d) corrosion resistance of the material

- Q.13** In the creep test, the following type of stress is applied to the specimen
 (a) uniaxial compression
 (b) uniaxial tension
 (c) biaxial compression or tension
 (d) alternating stress
- Q.14** A free bar of length l is uniformly heated from 0°C to a temperature $t^\circ\text{C}$, α is the coefficient of linear expansion and E is the modulus of elasticity. The stress in the bar is
 (a) $\alpha t E$ (b) $\alpha t E/2$
 (c) zero (d) None of these
- Q.15** A test specimen is stressed slightly beyond the yield point and then unloaded. Its yield strength
 (a) decreases
 (b) increases
 (c) remains same
 (d) becomes equal to ultimate tensile strength
- Q.16** Cup-and-cone type fracture occurs in the case of
 (a) cast iron
 (b) round specimen of ductile metals
 (c) tough steel
 (d) soft brass
- Q.17** Materials having elongation less than 5% are considered brittle. In such cases, factor of safety is based on
 (a) yield stress
 (b) endurance limit
 (c) limit of proportionality
 (d) ultimate stress
- Q.18** A rod of length ' l ' and cross-sectional area ' A ' rotates about an axis passing through one end of the rod. The extension produced in the rod due to centrifugal forces is (w is the weight of the rod per unit length and ω is the angular velocity of rotation of the rod)
 (a) $\omega w l^2 g E$ (b) $\omega^2 w l^3 / 3 g E$
 (c) $\omega^2 w l^3 / g E$ (d) $3 g E / \omega^2 l^3$
- Q.19** Young's modulus of elasticity and Poisson's ratio of a material are 1.25×10^5 MPa and 0.34 respectively. The modulus of rigidity of the material is
 (a) 0.4025×10^5 MPa
 (b) 0.4664×10^5 MPa
 (c) 0.8375×10^5 MPa
 (d) 0.9469×10^5 MPa
- Q.20** In a homogeneous, isotropic elastic material, the modulus of elasticity E in terms of G and K is equal to
 (a) $(G + 3K)/9KG$ (b) $(3G + K)/9KG$
 (c) $9KG/(G + 3K)$ (d) $9KG/(K + 3G)$
- Q.21** The unit of elastic modulus is the same as those of
 (a) stress, shear modulus and pressure
 (b) strain, shear modulus and force
 (c) shear modulus, stress and force
 (d) stress, strain and pressure
- Q.22** For a linearly elastic, isotropic and homogeneous material, the number of elastic constants required to relate stress and strain is
 (a) two (b) three
 (c) four (d) six
- Q.23** If the cross-section of a member is subjected to a uniform shear stress of intensity ' q ', then the strain energy stored per unit volume is equal to (G = modulus of rigidity)
 (a) $2q^2/G$ (b) $2G/q^2$
 (c) $q^2/2G$ (d) $G/2q^2$
- Q.24** In the case of an engineering material under unidirectional stress in the x -axis, the Poisson's ratio is equal to (symbols have their usual meanings)
 (a) ϵ_y/ϵ_x (b) ϵ_y/σ_x
 (c) ϵ_y/σ_s (d) σ_y/ϵ_x
- Q.25** A 100 mm long and 50 mm diameter steel rod fits snugly between two rigid walls 100 mm apart at room temperature. Young's modulus of elasticity and coefficient of linear expansion of steel are 2×10^5 N/mm² and $12 \times 10^{-6}/^\circ\text{C}$ respectively. The stress developed in the rod due to a 100°C rise in temperature will be
 (a) 6×10^{-11} N/mm² (b) 6×10^{-10} N/mm²
 (c) 240 N/mm² (d) 2400 N/mm²
- Q.26** During tensile testing of a specimen using a Universal Testing Machine, the parameters actually measured include
 (a) true stress and true strain
 (b) Poisson's ratio and Young's modulus
 (c) engineering stress and engineering strain
 (d) load and deflection

- Q.27** If the value of Poisson's ratio is zero, then it means that
 (a) the material is rigid
 (b) the material is perfectly plastic
 (c) there is no longitudinal strain in the material
 (d) the longitudinal strain in the material is infinite
- Q.28** The stretch in a steel rod of circular section, having a length l subjected to a tensile load P and tapering uniformly from a diameter d_1 , at one end to a diameter d_2 at the other end, is given by
 (a) $Pl/4Ed_1d_2$ (b) $P\pi/Ed_1d_2$
 (c) $Pl/4E(d_1 - d_2)$ (d) $4Pl/\pi Ed_1d_2$
- Q.29** If Poisson's ratio for a material is 0.5, then the elastic modulus for the material is
 (a) three times its shear modulus
 (b) four times its shear modulus
 (c) equal to its shear modulus
 (d) indeterminate
- Q.30** The Poisson's ratio of a material which has Young's modulus of 120 GPa, and shear modulus of 50 GPa, is
 (a) 0.1 (b) 0.2
 (c) 0.3 (d) 0.4
- Q.31** A rod of material $E = 200 \times 10^3$ MPa and $\alpha = 10^{-3}$ mm/mm/°C is fixed at both the ends. It is uniformly heated such that the increase in temperature is 30°C. The stress developed in the rod is
 (a) 6000 N/mm² (tensile)
 (b) 6000 N/mm² (compressive)
 (c) 2000 N/mm² (tensile)
 (d) 2000 N/mm² (compressive)
- Q.32** The deformation of a bar under its own weight as compared to that when subjected to a direct axial load equal to its own weight will be
 (a) the same (b) one-fourth
 (c) half (d) double
- Q.33** The number of independent elastic constants required to express the stress-strain relationship for linearly elastic isotropic material is
 (a) one (b) two
 (c) three (d) four
- Q.34** A tapering bar (diameters of end sections being d_1 and d_2) and a bar of uniform cross-section ' d ' have the same length and are subjected to the same axial pull. Both the bars will have the same extension if ' d ' is equal to
 (a) $(d_1 + d_2)/2$ (b) $\sqrt{d_1d_2}$
 (c) $\sqrt{d_1d_2/2}$ (d) $\sqrt{(d_1 + d_2)/2}$
- Q.35** The number of elastic constants for a completely anisotropic elastic material which follows Hooke's law is
 (a) 2 (b) 4
 (c) 21 (d) 25
- Q.36** For a given material, the modulus of rigidity is 100 GPa and Poisson's ratio is 0.25. The value of modulus of elasticity in GPa is
 (a) 125 (b) 150
 (c) 200 (d) 250
- Q.37** A cube having each side of length ' a ' is constrained in all directions and is heated uniformly so that the temperature is raised to $T^\circ\text{C}$. If α is the thermal coefficient of expansion of the cube material and E is the modulus of elasticity, the stress developed in the cube is
 (a) $\frac{\alpha TE}{v}$ (b) $\frac{\alpha TE}{(1-2v)}$
 (c) $\frac{\alpha TE}{2v}$ (d) $\frac{\alpha TE}{(1+2v)}$
- Q.38** Toughness for mild steel under uniaxial tensile loading is given by the shaded portion of the stress-strain diagram as shown in





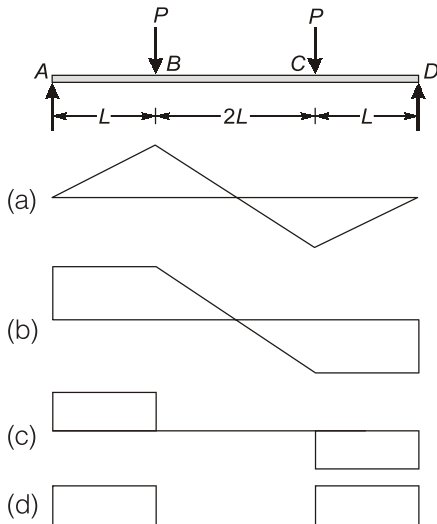
- Q.39** Which one of the following is correct in respect of Poisson's ratio (ν) limits for an isotropic elastic solid?
- (a) $-\infty \leq \nu \leq \infty$ (b) $1/4 \leq \nu \leq 1/3$
 (c) $-1 \leq \nu \leq 1/2$ (d) $-1/2 \leq \nu \leq 1/2$
- Q.40** A bar of copper and steel form a composite system. They are heated to a temperature of 40°C . What type of stress is induced in the copper bar?
- (a) tensile (b) compressive
 (c) shear (d) None of these
- Q.41** A cube with a side length of 1 cm is heated uniformly 1°C above the room temperature and all the sides are free to expand. What will be the increase in volume of the cube? (Given coefficient of thermal expansion is α per $^\circ\text{C}$)
- (a) $3\alpha\text{ cm}^3$ (b) $2\alpha\text{ cm}^3$
 (c) $\alpha\text{ cm}^3$ (d) zero
- Q.42** If E , G and K denote Young's modulus of elasticity, Modulus of rigidity and Bulk modulus, respectively, for an elastic material then which one of the following can be possibly true?
- (a) $G = 2K$ (b) $G = E$
 (c) $K = E$ (d) $G = K = E$
- Q.43** Consider the following statements:
- Strength of steel increases with carbon content
 - Young's modulus of steel increases with carbon content
 - Young's modulus of steel remains unchanged with variation of carbon content
- Which of these statements is/are correct?
- (a) 1 only (b) 2 only
 (c) 1 and 2 (d) 1 and 3
- Q.44** A solid uniform metal bar of diameter D and length L is hanging vertically from its upper end. The elongation of the bar due to self weight is
- (a) Proportional to L and inversely proportional to D^2
 (b) Proportional to L^2 and inversely proportional to D^2
 (c) Proportional to L but independent of D
 (d) Proportional to L^2 but independent of D
- Q.45** E , G , K and ν represent the elastic modulus, shear modulus, bulk modulus and Poisson's ratio respectively of a linearly elastic, isotropic and homogeneous material. To express the stress-strain relations completely for this material, at least
- (a) E , G and ν must be known
 (b) E , K and ν must be known
 (c) any two of the four must be known
 (d) All the four must be known
- Q.46** Steel has its yield strength of 400 N/mm^2 and modulus of elasticity of $2 \times 10^5\text{ MPa}$. Assuming the material to obey Hooke's law up to yielding, what is its proof resilience?
- (a) 0.8 N/mm^2 (b) 0.4 N/mm^2
 (c) 0.6 N/mm^2 (d) 0.7 N/mm^2
- Q.47** In a tensile test, near the elastic limit zone
- (a) tensile stress increases at a faster rate
 (b) tensile stress decreases at a faster rate
 (c) tensile stress increases in linear proportion to the strain
 (d) tensile stress decreases in linear proportion to the strain
- Q.48** Given that for an element in a body of homogeneous isotropic material subjected to plane stress; e_x , e_y and e_z are normal strains in x , y and z directions respectively and μ is the Poisson's ratio, the magnitude of unit volume change of the element is given by
- (a) $e_x + e_y + e_z$ (b) $e_x - (e_y + e_z)$
 (c) $\mu(e_x + e_y + e_z)$ (d) $\frac{1}{e_x} + \frac{1}{e_y} + \frac{1}{e_z}$

- Q.49** The ratio of the lateral pressure of the bulk storage material at the time of emptying to that at the time of filling is
 (a) less than one
 (b) equal to or less than one
 (c) equal to one
 (d) greater than one
- Q.50** The stress below which a material has a high probability of not failing under reversal of stress is known as
 (a) tolerance limit (b) elastic limit
 (c) proportional limit (d) endurance limit
- Q.51** Consider the following statements:
 The principal of super position is applied to:
 1. Linear elastic bodies.
 2. Bodies subjected to small deformations.
 Which of these statements is/are correct?
 (a) 1 alone (b) 1 and 2
 (c) 2 alone (d) Neither 1 nor 2
- Q.52** If all the dimensions of a bar are increased in the proportion $n : 1$, the proportion with which the maximum stress produced in the prismatic bar by its own weight, will increase in the ratio
 (a) $1 : n$ (b) $n : 1$
 (c) $1 : \frac{1}{n}$ (d) $\frac{1}{n} : 1$
- Q.53** A bar is subjected to an axial tensile stress. If the volumetric strain in the bar is 0.44 times the axial strain, what is the Poisson's ratio of the material?
 (a) 0.44 (b) 0.30
 (c) 0.28 (d) None of these
- Q.54** On a plane, resultant stress is inclined at an angle of 30° with the plane. If the normal stress on the plane is 50 MPa, what is the shear stress on the plane.
 (a) 43.3 MPa (b) 86.6 MPa
 (c) 100 MPa (d) None of these
- Q.55** A bar of a square section $a \times a$ subjected to a tensile load P on a plane inclined at 45° to the axis of the bar, normal stress will be
 (a) $\frac{2P}{a^2}$ (b) $\frac{P}{a^2}$
 (c) $\frac{P}{2a^2}$ (d) $\frac{P}{4a^2}$
- Q.56** Two tie rods are connected, through a pin of a cross-sectional area of 40 mm^2 . If the tie rods carry a tensile load of 10 kN, the shear stress in the pin is
 (a) 125 MPa (b) 250 MPa
 (c) 500 MPa (d) None of these
- Q.57** A spherical ball of volume 1000 cm^3 is subjected to a hydrostatic pressure of 90 N/mm^2 and bulk modulus of the material is 190 kN/mm^2 . What is the change in volume of the ball?
 (a) 473 mm^3 (b) 940 mm^3
 (c) 502 mm^3 (d) None of these
- Q.58** In stress-strain curve, the area upto elastic limit stress indicates which mechanical property?
 (a) Ductility (b) Strength
 (c) Resilience (d) None of these
- Q.59** In σ - ϵ curve for mild steel, load at which considerable extension occurs with decrease in resistance is known as?
 (a) Upper yield point (b) Breaking load
 (c) Ultimate load (d) None of these
- Q.60** A composite bar is made of steel and aluminium strips, with $A_a = 3A_s$, where A_a and A_s are areas of cross-section of aluminium and steel bars, respectively $E_s/E_a = 3$. Due to an external load, if the stress developed in the aluminium is 30 MPa, then what is the stress developed in the steel bar?
 (a) 10 MPa (b) 30 MPa
 (c) 90 MPa (d) None of these
- Q.61** A copper bar of area of cross-section 200 mm^2 is encased in a steel tube of area of cross-section 400 mm^2 . Due to an external load, the stress in copper bar is 10 MPa and load on composite bar is P . What is the load shared by the steel bar?
 $\frac{E_s}{E_{cu}} = 2$
 (a) $0.5 P$ (b) $0.6 P$
 (c) $0.8 P$ (d) None of these
- Q.62** A bimetallic strip is made of two metals with equal areas of cross-section. Due to temperature change, the stress developed in one strip is -40 N/mm^2 . What is the stress developed in another component of the composite bar?
 (a) -40 N/mm^2 (b) 20 N/mm^2
 (c) 40 N/mm^2 (d) -20 N/mm^2

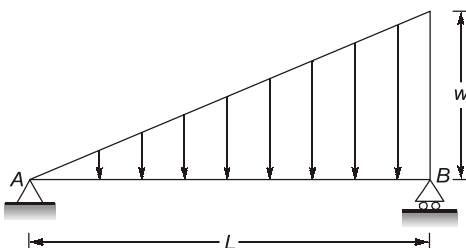
- Q.63** Three strips of same area of cross-section share a load of 5.5 kN. If their Young's modulus are in the ratio of $E_1 = 2E_2 = 3E_3$, then what is the load, shared by the strip with Young's modulus E_1
- (a) 3 kN (b) 3.5 kN
(c) 2.5 kN (d) 2 kN
- Q.64** A steel rail track is laid by joining 30 m long rails end to end. At 30°C there is no stress in the rails. At 50°C, what will be the stress in the rails if $\alpha = 11 \times 10^{-6}/^\circ\text{C}$ and $E = 2 \times 10^5 \text{ N/mm}^2$
- (a) 88 MPa (b) 44 MPa
(c) 22 MPa (d) 11 MPa
- Q.65** True stress σ is related with conventional stress σ_0 as
- (a) $\frac{\sigma}{\sigma_0} = (1 + \epsilon)^2$ (b) $\frac{\sigma}{\sigma_0} = \frac{1}{(1 + \epsilon)^2}$
(c) $\frac{\sigma}{\sigma_0} = \frac{1}{1 + \epsilon}$ (d) $\frac{\sigma}{\sigma_0} = 1 + \epsilon$

2. Shear Force and Bending Moment

- Q.66** For the loaded beam shown in the figure, the correct shear force diagram is

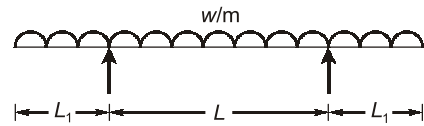


- Q.67** For the simply supported beam, shown in the figure below at what distance from the support A is the shear force zero?



- (a) $\frac{L}{4}$ (b) $\frac{L}{3}$
(c) $\frac{L}{2}$ (d) $\frac{L}{\sqrt{3}}$

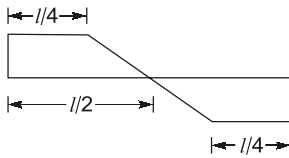
- Q.68** For the beam shown in the given figure, the maximum positive bending moment is equal to the maximum negative bending moment. The value of L_1 is



- (a) $\frac{L}{\sqrt{2}}$ (b) $\frac{L}{\sqrt{3}}$
(c) $\frac{L}{2}$ (d) $\frac{L}{2\sqrt{2}}$

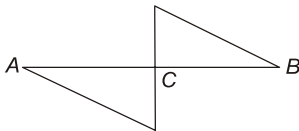
- Q.69** The maximum bending moment due to a moving load on a fixed ended beam occurs
- (a) at a support
(b) always at the mid span
(c) under the load only
(d) None of the above
- Q.70** If a beam is subjected to a constant bending moment along its length then the shear force will
- (a) also have a constant value every where along its length
(b) be zero at all sections along the beam
(c) be maximum at the centre and zero at the ends
(d) be maximum at the ends and zero at the centre
- Q.71** If the shear force acting at every section of a beam is of the same magnitude and of the same direction, then it represents a
- (a) simply supported beam with a concentrated load at the centre
(b) overhang beam having equal overhang at both supports and carrying equal concentrated loads acting in the same direction at the free ends
(c) cantilever subjected to concentrated load at the free end
(d) simply supported beam having concentrated loads of equal magnitude and in the same direction acting at equal distances from the supports

Q.72 The shear force diagram shown in the figure is that of a



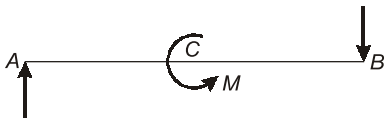
- (a) freely supported beam with symmetrical point load about mid-span
- (b) freely supported beam with symmetrical uniformly distributed load about mid-span
- (c) simply supported beam with positive and negative point loads symmetrical about the mid-span
- (d) simply supported beam with symmetrical varying load about mid-span

Q.73 If the bending moment diagram for a simply supported beam is of the form as given in figure then the load acting on the beam is



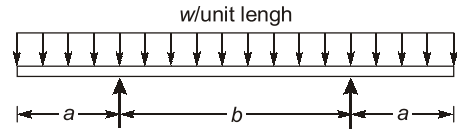
- (a) a concentrated force at C
- (b) a uniformly distributed load over the whole length of the beam
- (c) equal and opposite moments applied at A and B
- (d) a moment applied at C

Q.74 A beam is simply supported at its ends and is loaded by a couple at its mid-span as shown in figure. Shear force diagram for the beam is given by the figure



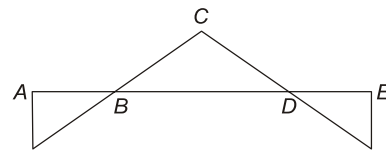
- (a)
- (b)
- (c)
- (d)

Q.75 A horizontal beam carrying uniformly distributed load is supported with equal overhangs as shown in the figure below. The resultant bending moment at the mid-span shall be zero if a/b is



- (a) $3/4$
- (b) $2/3$
- (c) $1/2$
- (d) $1/3$

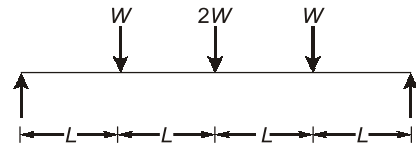
Q.76 Bending moment distribution in a beam is shown in the figure below.



The shear force diagram will be given by

- (a)
- (b)
- (c)
- (d)

Q.77 A simply supported beam is loaded as shown in the figure. The maximum shear force in the beam will be

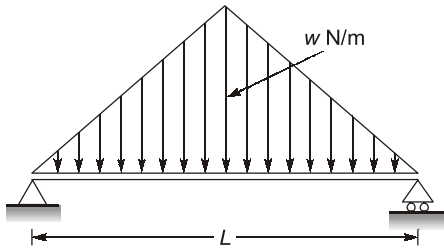


- (a) Zero
- (b) W
- (c) $2W$
- (d) $4W$

Q.78 The shape of the bending moment diagram for a cantilever beam carrying a uniformly distributed load over its length is

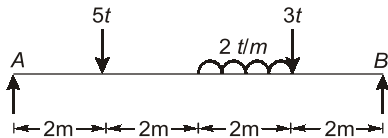
- (a) a straight line
- (b) a hyperbola
- (c) an ellipse
- (d) a parabola

- Q.79** A simply supported beam is subjected to a distributed loading as shown in the diagram given



What is the maximum shear force in the beam?

- (a) $wL/4$ (b) $wL/2$
 (c) $wL/3$ (d) $wL/6$
- Q.80** The point of contraflexure is a point where
- (a) Shear force changes sign
 (b) Bending moment changes sign
 (c) Shear force is maximum
 (d) Bending moment is maximum
- Q.81** The ratio of reactions R_A and R_B of the simply supported beam (as shown) is



- (a) $1/2$ (b) $2/3$
 (c) 1 (d) $3/2$
- Q.82** The bending moment in a simple supported beam can be calculated with the help of influence line drawn for the following types of load
- (a) a single point load
 (b) a uniformly distributed load
 (c) a number of point loads
 (d) All of the above three
- Q.83** In a simply supported beam of length ' L ' with a triangular load varying from zero at one end to the maximum value at the other end, the maximum bending moment is
- (a) $\frac{wL^2}{3}$ (b) $\frac{2wL^2}{9\sqrt{3}}$
 (c) $\frac{wL}{4}$ (d) $\frac{wL^2}{9\sqrt{3}}$
- Q.84** For a simply supported beam of length L , the bending moment M is described as $M = a(x - x^3/L^2)$, $0 \leq x < L$; where a is a constant. The shear force will be zero at

- (a) the supports (b) $x = L/2$
 (c) $x = L/\sqrt{3}$ (d) $x = L/3$

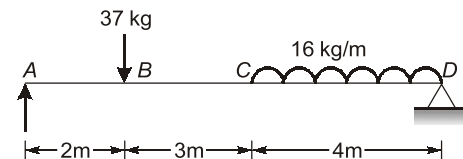
- Q.85** Match List-I (Type of beam with type of loading) with List-II (Maximum BM formula) and select the correct answer using the codes given below the lists:

List-I	List-II
A.	1. $\frac{wL^2}{12}$
B.	2. $\frac{wL^2}{6}$
C.	3. $\frac{wL^2}{2}$
D.	4. $\frac{wL^2}{8}$

Codes:

	A	B	C	D
(a)	2	3	1	4
(b)	1	2	3	4
(c)	4	3	1	2
(d)	2	1	4	3

- Q.86** With reference to following figure, match List-I with List-II and select the correct answer by using codes given below the lists:

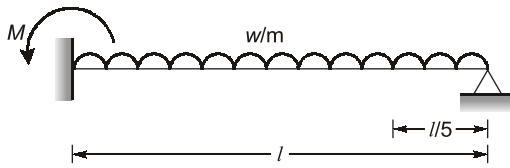


List-I	List-II
A. SF at A	1. 6 kg
B. SF at B	2. 58 kg
C. SF at C	3. 43 kg
D. SF at D	4. 48 kg

Codes:

	A	B	C	D
(a)	1	2	3	4
(b)	3	1	4	2
(c)	3	1	1	2
(d)	2	4	1	3

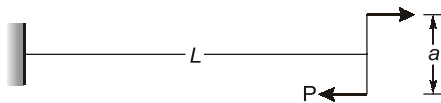
Q.87 In figure the maximum bending moment at the fixed end of the cantilever caused by the UDL is M .



The bending moment at a section $l/5$ from the free end is

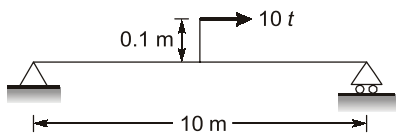
- (a) 4% of M
- (b) 5% of M
- (c) 10% of M
- (d) 20% of M

Q.88 The shear force along the beam shown in the figure is



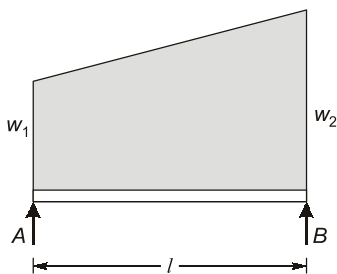
- (a) uniformly varying
- (b) uniform
- (c) zero
- (d) concentrated at A and B only

Q.89 The correct shear force diagram for the beam shown in the figure is



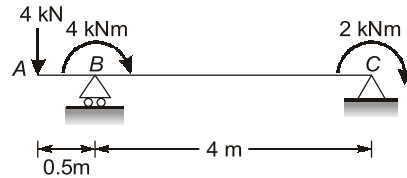
- (a)
- (b)
- (c)
- (d)

Q.90 A simply supported beam of span l is loaded (as shown) with a udl of intensity w_1 per unit length at A and w_2 per unit length at B the shear force at the support B is given by



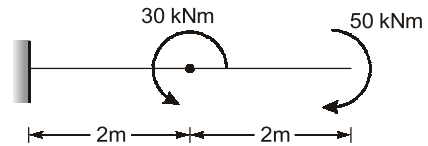
- (a) $\frac{(w_1 + w_2)l}{3}$
- (b) $\frac{(w_1 + w_2)l}{6}$
- (c) $\frac{w_1 l}{6} + \frac{w_2 l}{3}$
- (d) $\frac{w_2 l}{3} + \frac{w_2 l}{6}$

Q.91 The beam shown in the given figure has a design value of bending moment of



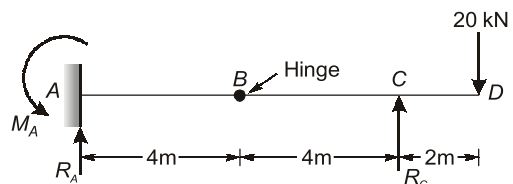
- (a) 8 kN-m
- (b) 6 kN-m
- (c) 4 kN-m
- (d) 2 kN-m

Q.92 A cantilever beam is subjected to moments as shown in the given figure. The BM diagram for the beam will be



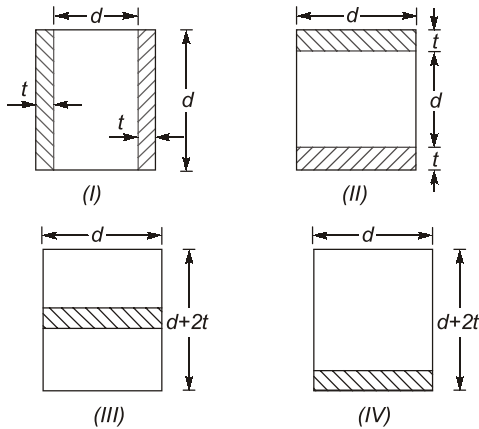
- (a)
- (b)
- (c)
- (d)

Q.93 The fixed end moment M_A of the beam shown in the given figure is



- (a) +40 kNm
- (b) -40 kNm
- (c) +80 kNm
- (d) -80 kNm

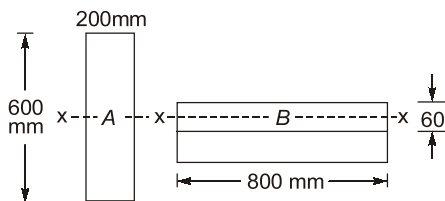
Q.104 The modular ratio of the materials used in the flitched beam is 10 and the ratio of the allowable stresses is also 10. Four different sections of the beam are shown in the given figures. The material shown hatched has larger modulus of elasticity and allowable stress than the rest.



Which one of the following statements is true for the beam under consideration?

- (a) All the given sections would support the same magnitude of load.
- (b) Sections II, III and IV would support equal loads which is more than what section I would support.
- (c) Sections I and II would support equal loads which is more than what section III and IV would support.
- (d) Section II would support greatest load.

Q.105



Cross-sections of two beams A (600 mm × 200 mm) and B (800 mm × 60 mm) are shown in the figure given above. Both the beams have the same material. By how many times is the beam A stronger than the beam B in resisting bending

- (a) 80
- (b) 60
- (c) 50
- (d) 25

Q.106 A beam of uniform strength refers to which one of the following?

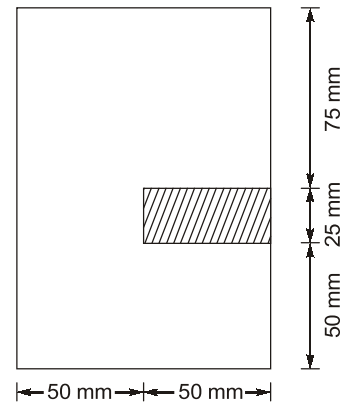
- (a) A beam in which extreme fibre stresses are same at all cross-sections along the length of the beam

- (b) A beam in which the moment of inertia about the axis of bending is constant at all cross-section of the beam
- (c) A beam in which the distribution of bending stress across the depth of cross-section is uniform at the all cross-sections of the beam
- (d) A beam in which the bending stress is uniform at the maximum bending moment cross-section.

Q.107 Maximum shear stress in a circular cross-section is

- (a) $\frac{9}{8}q_{av}$
- (b) $\frac{4}{3}q_{av}$
- (c) $\frac{3}{2}q_{av}$
- (d) $\frac{8}{3}q_{av}$

Q.108 A beam with the cross-section given below is subjected to a positive bending moment (causing compression at top) of 16 kNm acting around the horizontal axis. The tensile force acting on the hatched area of cross-section is

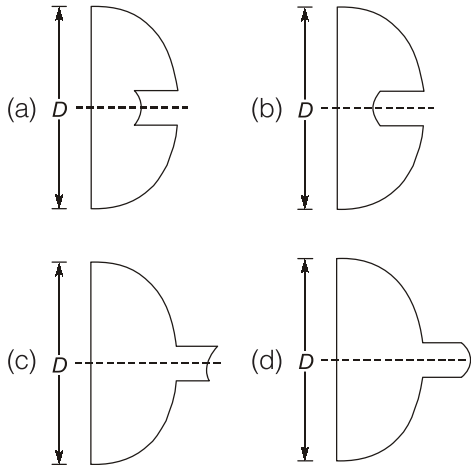
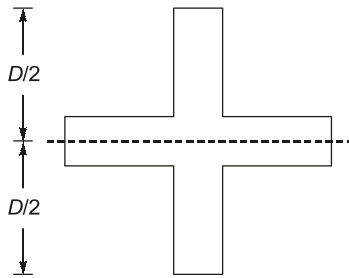


- (a) Zero
- (b) 5.9 kN
- (c) 8.9 kN
- (d) 17.8 kN

Q.109 Shear stress in a beam having triangular cross-section is maximum at

- (a) extreme top fibre
- (b) mid-depth
- (c) neutral axis
- (d) extreme bottom fibre

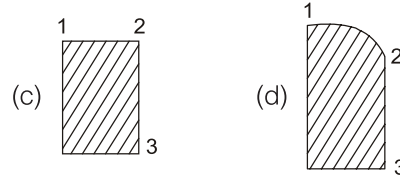
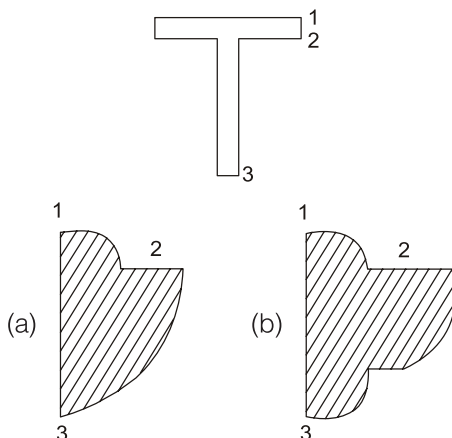
Q.110 The cross-section of a beam in bending is as shown in the figure. It is subjected to shear force acting in the plane of cross-section. Which among the following figure shows the correct shear stress distribution across the depth of the cross-section of the beam?



Q.111 A beam of square cross-section ($B \times B$) is used as a beam with one diagonal horizontal. The location of the maximum shear stress from the neutral axis will be at distance of

- (a) Zero (b) $\frac{B}{4}$
 (c) $\frac{B}{4\sqrt{2}}$ (d) $\frac{B}{8}$

Q.112 Which one of the following diagrams indicates the shear stress distribution for the beam as shown in the figure below?



Q.113 A beam is of I-section with flanges $200 \text{ mm} \times 10 \text{ mm}$ and web $180 \text{ mm} \times 10 \text{ mm}$. Due to the bending moment applied on the beam section, maximum stress developed in the beam section is 100 MPa , what is the stress developed at inner edge of the flange?

- (a) 110 MPa (b) 100 MPa
 (c) 90 MPa (d) 120 MPa

Q.114 A MS beam is subjected to a bending moment, such that a stress of 100 MPa is developed in a layer at a distance of 100 mm from the neutral layer. If $E = 200 \text{ GPa}$, what is the radius of curvature of the beam?

- (a) 400 m (b) 200 m
 (c) 100 m (d) 50 m

Q.115 A cantilever of uniform strength σ , having rectangular section of constant breadth b but variable depth d is subjected to a UDL throughout its length. If the depth of the section is 150 mm at the fixed end, then what is the depth of the middle of the length of cantilever

- (a) 150 mm (b) 100 mm
 (c) 75 mm (d) 125 mm

Q.116 A beam with a square section of $80 \text{ mm} \times 80 \text{ mm}$ is simply supported at its ends. A load W is applied at the centre of the beam. If the maximum shear stress developed in the beam section is 6 N/mm^2 . What is the magnitude of W ?

- (a) 2.56 kN (b) 25.6 kN
 (c) 51.2 kN (d) 5.12 kN

Q.117 A I-section is subjected to transverse shear force. At which layer maximum shear stress is developed?

- (a) Neutral axis
 (b) At top edge of flange
 (c) At bottom edge of flange
 (d) None of these